

[1] [B]

[2] [C]

[3] [C]

[4] [D]

[5] [B]

[6] [C]

[7] [D]

[8] [D]

[9] [D]

[10] [A]

[11] [C]

[12] [C]

[13] [B]

[14] [D]

[15] [A]

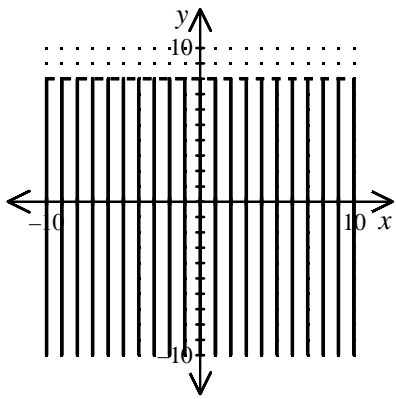
[16] [A]

[17] [C]

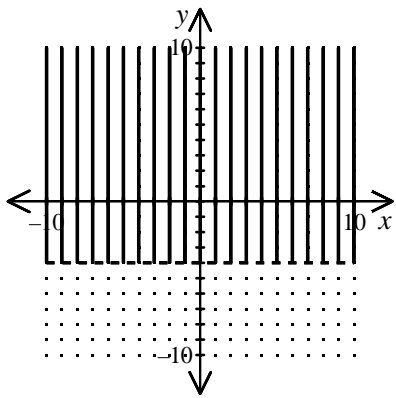
[18] [A]

[19] [A]

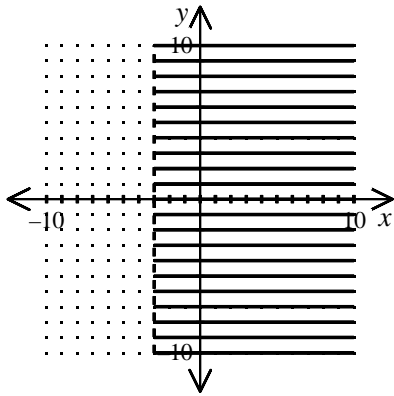
[20] [C]



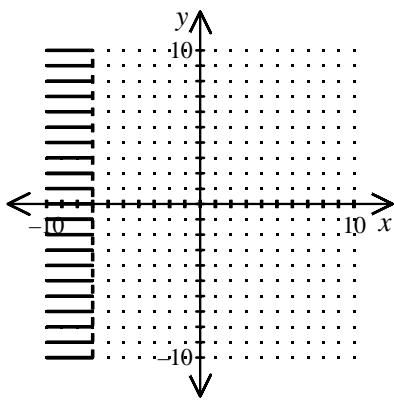
[21] _____



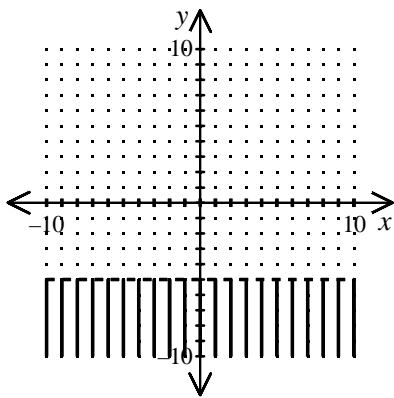
[22] _____



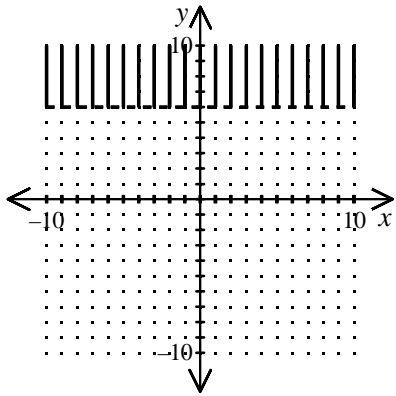
[23]



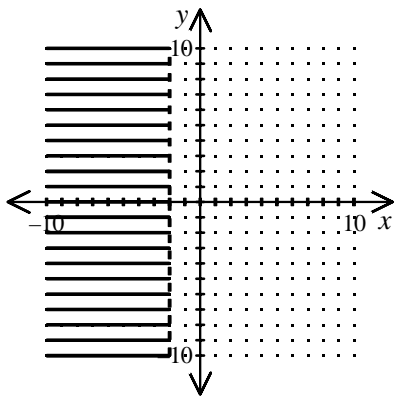
[24]



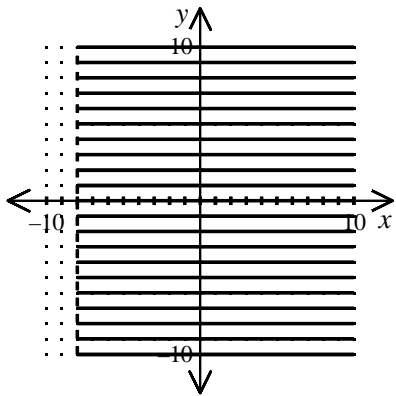
[25]



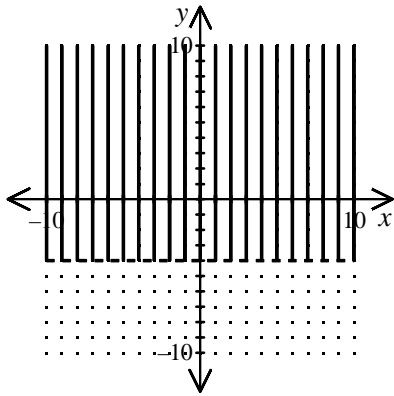
[26]



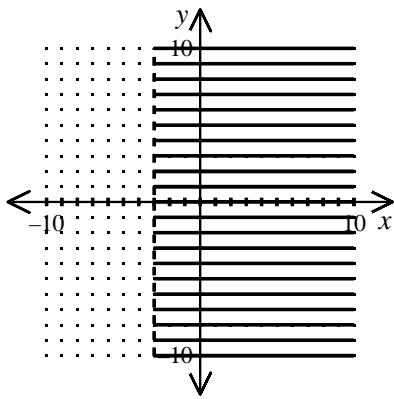
[27]



[28]



[29] _____



[30] _____

[31] $y \leq 2x - 6$ _____

[32] $y > 3x - 9$ _____

[33] $y \leq x + 1$ _____

[34] $y > 5x - 2$ _____

[35] $y < 4x + 5$ _____

[36] $y \geq 5x - 10$ _____

[37] $y \leq x + 4$ _____

[38] $y > 4x + 3$ _____

[39] $y > 2x + 7$ _____

[40] $y \leq 3x - 8$ _____